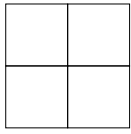
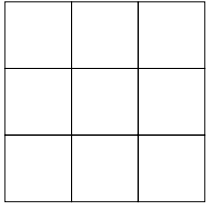


# Mal-Aufgaben

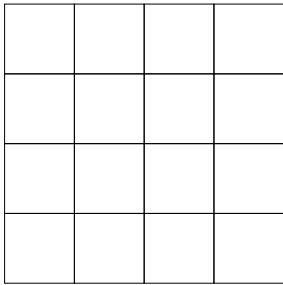
## Quadrat-Aufgaben



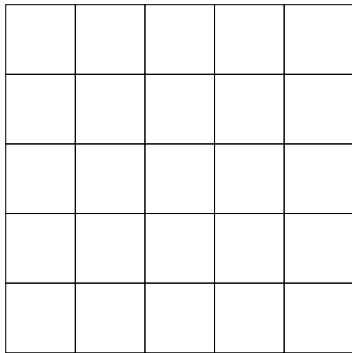
$$2 \times 2 = 4$$



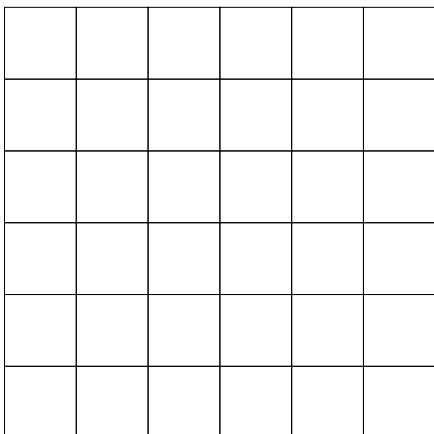
\_\_\_\_\_



\_\_\_\_\_



\_\_\_\_\_



\_\_\_\_\_

## Rechteck-Aufgaben



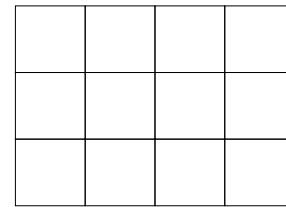
\_\_\_\_\_




\_\_\_\_\_




\_\_\_\_\_



\_\_\_\_\_



\_\_\_\_\_



\_\_\_\_\_



\_\_\_\_\_

11P=Note 1, 9-10P=Note 2, 6-8P=Note 3

Ich habe Note \_\_\_\_ erreicht!